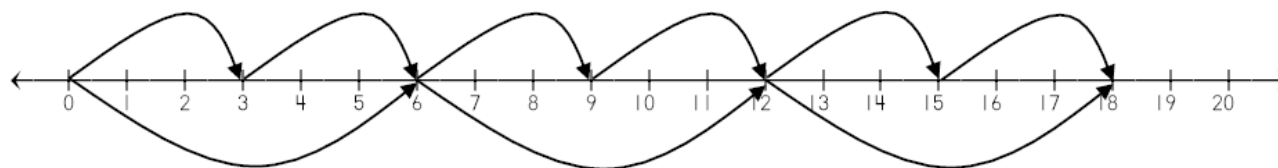


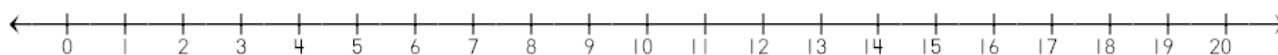
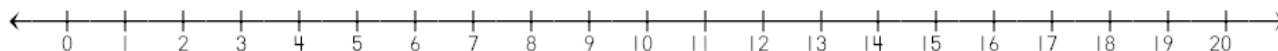
Name: _____ Date: _____

Kim showed the commutative property on a number line.

Which multiplication facts does she show?



Create two other examples of the commutative property with different multiplication facts. Show them on the number line.



Big Idea #8: Properties of Multiplication • Task 8B