


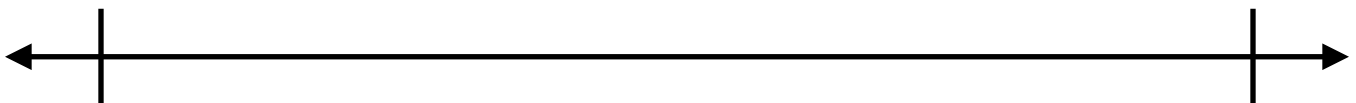
Name: _____ Date: _____

Add. Use the number line to justify your answer.


$$4\frac{3}{8} + 6\frac{4}{8}$$



$$4\frac{2}{3} + 4\frac{2}{3}$$



$$1\frac{2}{3} + 3\frac{5}{6}$$



Big Idea #39: Addition and Subtraction of Fractions Greater than 1 • Task 1 • Task 39A

Retrieved from the companion website for *Mine The Gap for Mathematical Understanding: Common Holes and Misconceptions and What to Do About Them, Grades 3-5* by John SanGiovanni. Thousand Oaks, CA: Corwin, www.corwin.com. Copyright © 2017 by Corwin. All rights reserved. Reproduction authorized only for the local school site or nonprofit organization that has purchased this book.