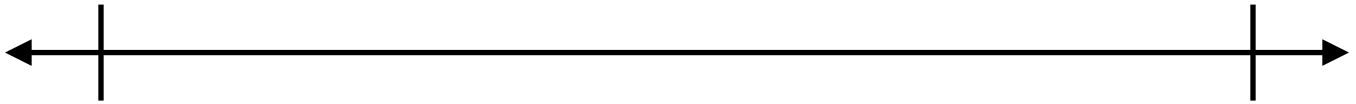


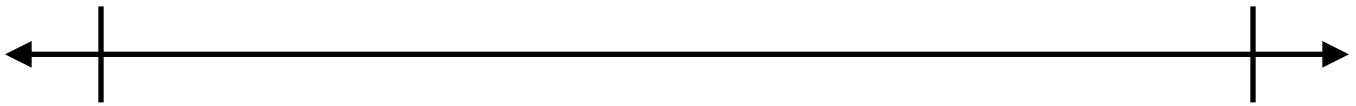
Name: \_\_\_\_\_ Date: \_\_\_\_\_

Subtract. Use the number line to justify your differences.

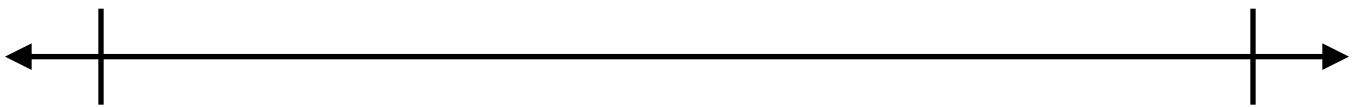
$$\frac{7}{10} - \frac{2}{10}$$



$$\frac{7}{8} - \frac{2}{4}$$



$$4\frac{1}{3} - 2\frac{2}{3}$$



Big Idea #36: Subtraction with fractions • Task 36B

Retrieved from the companion website for *Mine The Gap for Mathematical Understanding: Common Holes and Misconceptions and What to Do About Them, Grades 3-5* by John SanGiovanni. Thousand Oaks, CA: Corwin, [www.corwin.com](http://www.corwin.com). Copyright © 2017 by Corwin. All rights reserved. Reproduction authorized only for the local school site or nonprofit organization that has purchased this book.