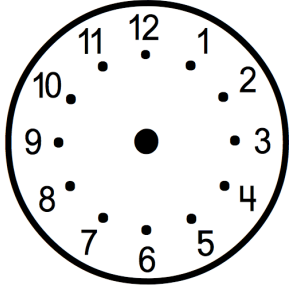
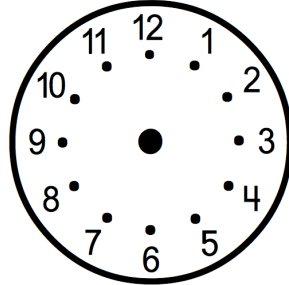


Name: _____ Date: _____

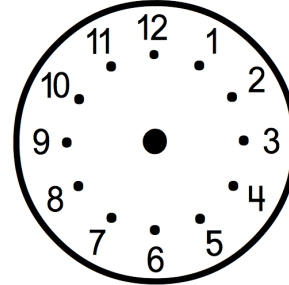
Read the time. Draw hands on the clock to show 1 hour 30 minutes earlier than the time listed.



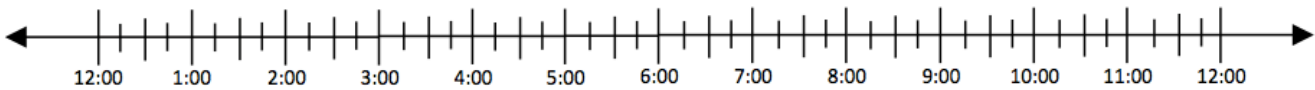
3:30



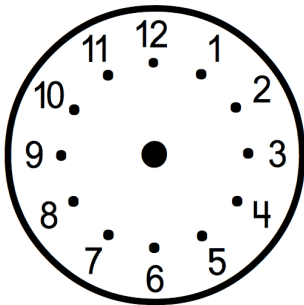
1:15



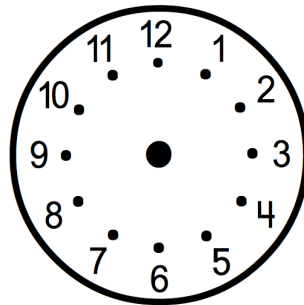
7:45



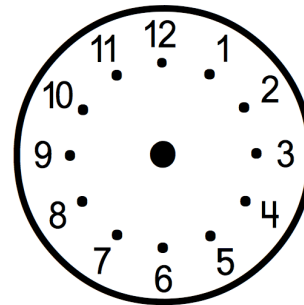
Read the time. Draw hands on the clock to show 3 hours and 15 minutes later.



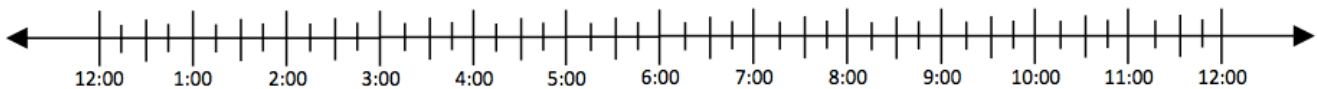
6:15



4:00



2:30



Big Idea #35: Telling Time and Elapsed Time • Task 35D

Retrieved from the companion website for *Mine The Gap for Mathematical Understanding: Common Holes and Misconceptions and What to Do About Them, Grades K-2* by John SanGiovanni. Thousand Oaks, CA: Corwin, www.corwin.com. Copyright © 2017 by Corwin. All rights reserved. Reproduction authorized only for the local school site or nonprofit organization that has purchased this book.