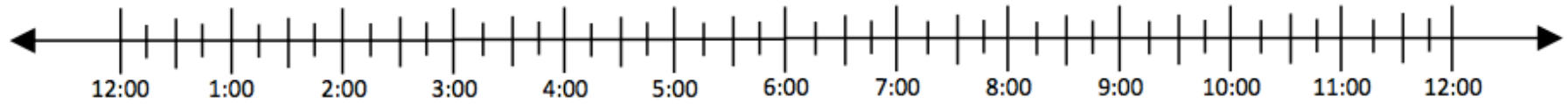
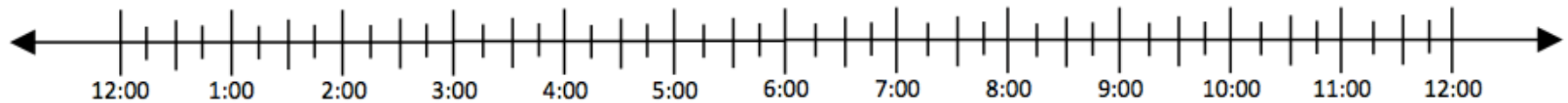


Name: _____ Date: _____

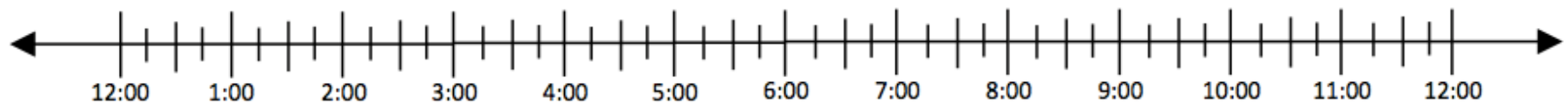
Dave's practice starts at 5:30 and is $2\frac{1}{2}$ hours long. Use the number line to show when Dave's practice ends.



A play is 3 hours and 15 minutes long and begins at 6:30. What time does it end?



Mia leaves for the beach at 12:30. It takes 4 hours and 45 minutes to get there. When will she arrive?



Big Idea #35: Telling Time and Elapsed Time • Task 35A

Retrieved from the companion website for *Mine The Gap for Mathematical Understanding: Common Holes and Misconceptions and What to Do About Them, Grades K-2* by John SanGiovanni. Thousand Oaks, CA: Corwin, www.corwin.com. Copyright © 2017 by Corwin. All rights reserved. Reproduction authorized only for the local school site or nonprofit organization that has purchased this book.