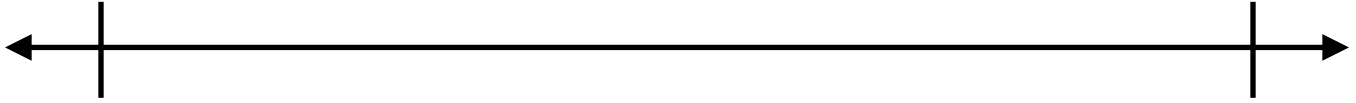


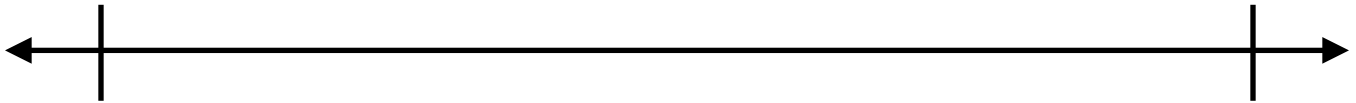
Name: _____ Date: _____

Use the number lines to add or subtract the fractions.

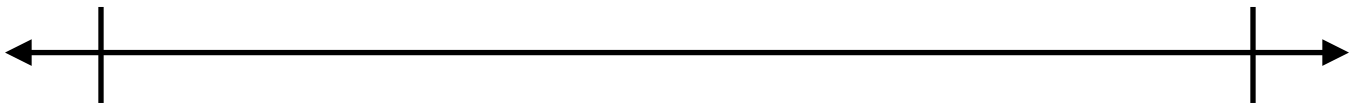
$$\frac{5}{8} + \frac{2}{8}$$



$$\frac{3}{4} + \frac{2}{4}$$



$$\frac{5}{4} + \frac{3}{4}$$



Big Idea #34: Addition with fractions on number lines • Task 34A

Retrieved from the companion website for *Mine The Gap for Mathematical Understanding: Common Holes and Misconceptions and What to Do About Them, Grades 3-5* by John SanGiovanni. Thousand Oaks, CA: Corwin, www.corwin.com. Copyright © 2017 by Corwin. All rights reserved. Reproduction authorized only for the local school site or nonprofit organization that has purchased this book.