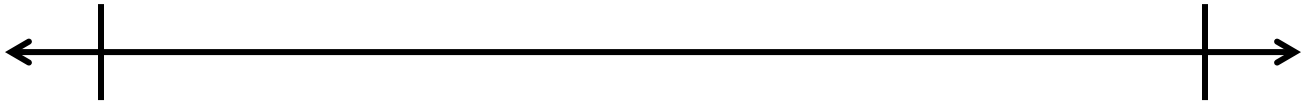


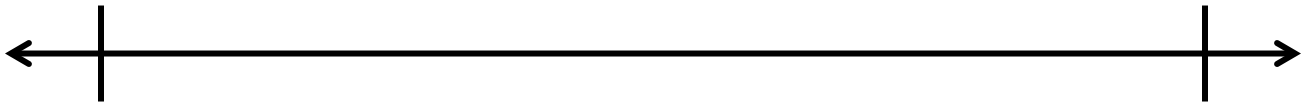
Name: _____ Date: _____

Subtract the decimals. Use the number line to show your work.

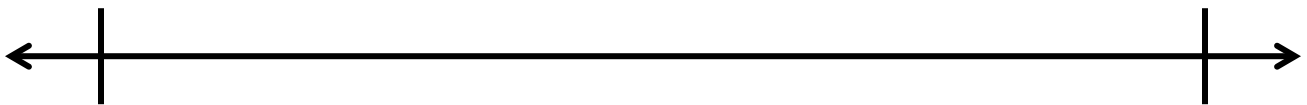
$$10.5 - 6.3$$



$$22.75 - 20.50$$



$$30.5 - 14.5$$



Big Idea #32: Subtracting with decimals • Task 32B

Retrieved from the companion website for *Mine The Gap for Mathematical Understanding: Common Holes and Misconceptions and What to Do About Them, Grades 3-5* by John SanGiovanni. Thousand Oaks, CA: Corwin, www.corwin.com. Copyright © 2017 by Corwin. All rights reserved. Reproduction authorized only for the local school site or nonprofit organization that has purchased this book.