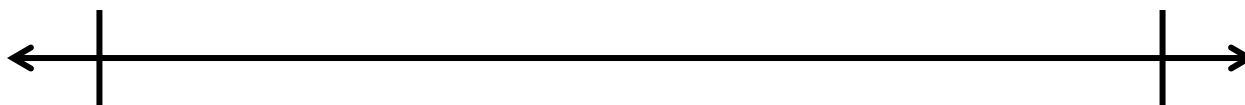


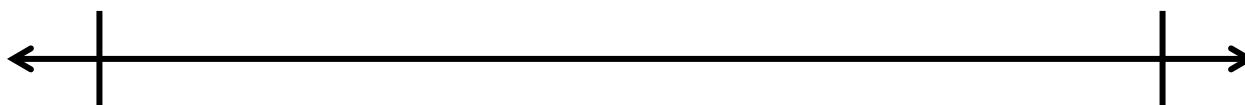
Name: _____ Date: _____

Estimate the decimal to the nearest whole number.
Use a number line below the decimal to justify your thinking.

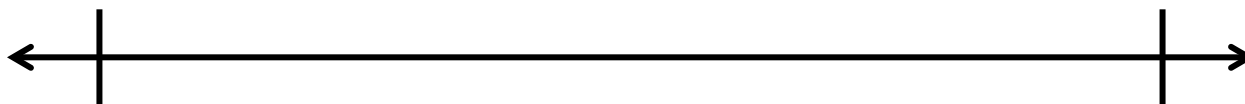
27.89



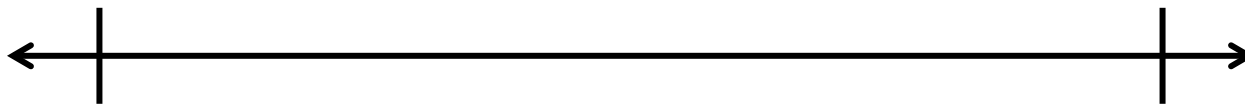
82.3



70.99



44.6



Big Idea #28: Estimating and rounding decimals • Task 28C

Retrieved from the companion website for *Mine The Gap for Mathematical Understanding: Common Holes and Misconceptions and What to Do About Them, Grades 3-5* by John SanGiovanni. Thousand Oaks, CA: Corwin, www.corwin.com. Copyright © 2017 by Corwin. All rights reserved. Reproduction authorized only for the local school site or nonprofit organization that has purchased this book.