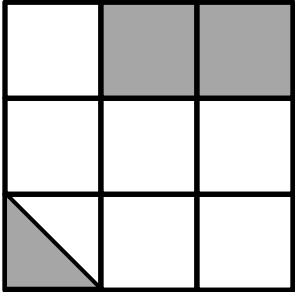
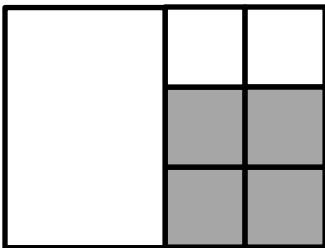
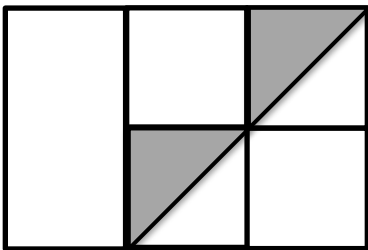


Name: _____ Date: _____

Tell what part of the figure is shaded. Tell how you found your answer.







Big Idea #25: More reasoning about fractions • Task 25C