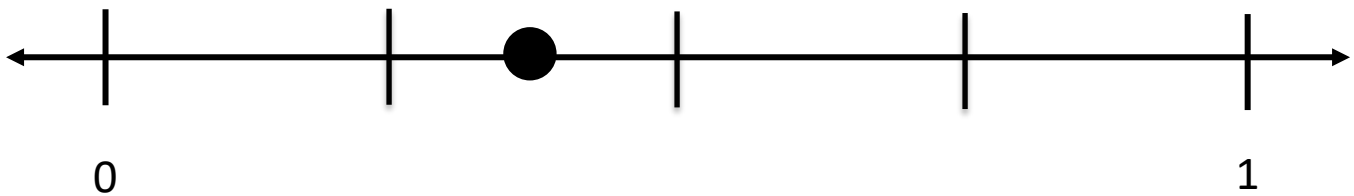

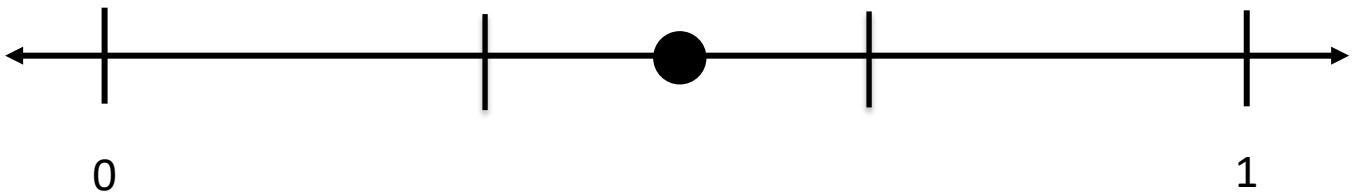
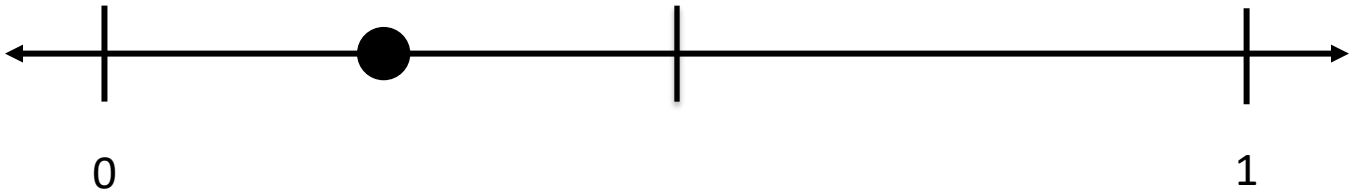


Name: _____ Date: _____

Write the fraction that each ● shows on the number line.



Big Idea #18: Connecting representations of fractions • Task 18B

Retrieved from the companion website for *Mine The Gap for Mathematical Understanding: Common Holes and Misconceptions and What to Do About Them, Grades 3-5* by John SanGiovanni. Thousand Oaks, CA: Corwin, www.corwin.com. Copyright © 2017 by Corwin. All rights reserved. Reproduction authorized only for the local school site or nonprofit organization that has purchased this book.