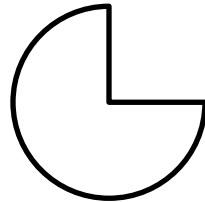
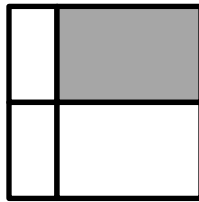

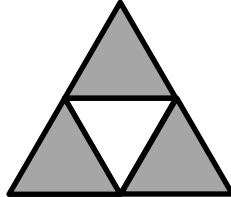

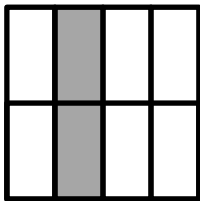
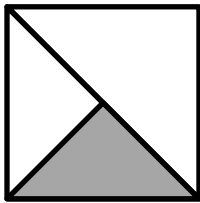


Name: \_\_\_\_\_ Date: \_\_\_\_\_

Circle the figures that show  $\frac{1}{4}$ .



Tell how you know if each of the figures below show  $\frac{1}{4}$ .



Big Idea #17: Representing fractions • Task 17A