




MYSTERY BOXES TASK

Mystery Boxes - Weight

					
Toy	box of chalk	truck	walkie talkies	bowling set	bag of sand
Weight	1 pound	2 pounds	5 pounds	15 pounds	20 pounds








Total Weight: 20 pounds



Total Weight: 45 pounds

What could be inside?

Mystery Boxes - Length

					
Toy	sand rake	paintbrush	rubber chicken	baseball bat	tent poles
Length	5 inches	10 inches	15 inches	20 inches	30 inches



Total of the Lengths Inside: 30 inches



Total of the Lengths Inside: 60 inches

What could be inside?

Clues:

- Box B contains one or more bowling sets.
- Box C does not contain tent poles.
- Box D contains two or fewer sand rakes

Image sources: box of chalk Jarp/iStock.com; truck TPopova/iStock.com; walkie talkies Nimdamer/iStock.com; bowling set BorisRabtsevich/iStock.com; bag of sand SKashkin/iStock.com; sand rake sirastock/iStock.com; paintbrush CHAIWATPHOTOS/iStock.com; rubber chicken EdnaM/iStock.com; baseball bat vav63/iStock.com; tent poles pkanchana/iStock.com; boxes carlosalvarez/iStock.com

Retrieved from the companion website for *Teaching Mathematics in the Visible Learning Classroom, Grades K–2* by John Almarode, Douglas Fisher, Kateri Thunder, John Hattie, and Nancy Frey. Thousand Oaks, CA: Corwin, www.corwin.com. Copyright © 2019 by Corwin. All rights reserved. Reproduction authorized for educational use by educators, local school sites, and/or noncommercial or nonprofit entities that have purchased the book.