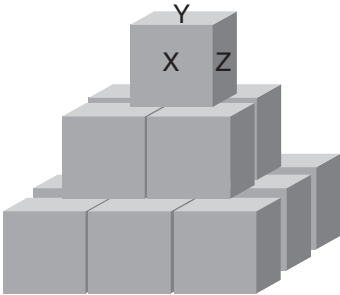


Puzzle 3:

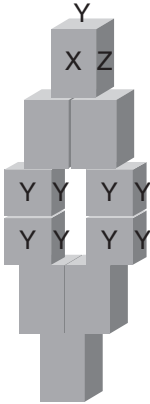


How many do we need
of each size piece?



X _____
Y _____
Z _____

Puzzle 4:

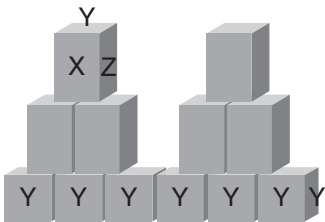


How many do we need
of each size piece?



X _____
Y _____
Z _____

Puzzle 5:



How many do we need
of each size piece?



X _____
Y _____
Z _____

Harder Decomposition Puzzles