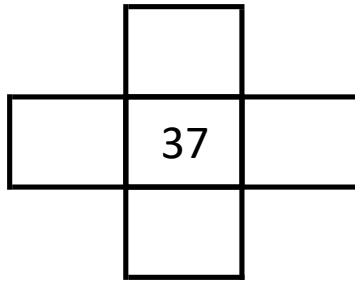




Name: _____



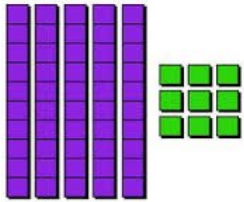
_____ ones = 1 ten



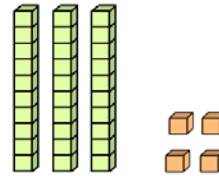
20 ones = _____ tens



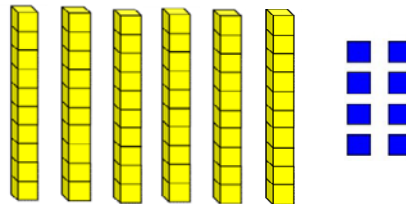
What is the value of 9 in 59?



What is the value of 3 in 34?



Write 68 in expanded form (notation)



45

What is 1 more (+1)?

What is 1 less (-1)?

What is 10 more (+10)?

What is 10 less (-10)?

